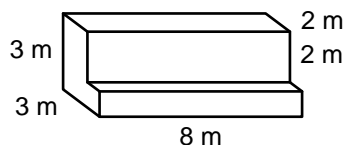




Name: _____ Date: _____

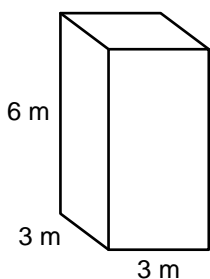
Calculate the volume of each solid.

(1)



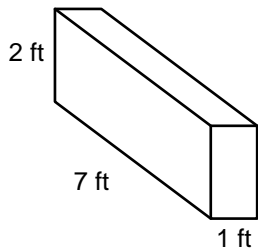
Volume: _____

(2)



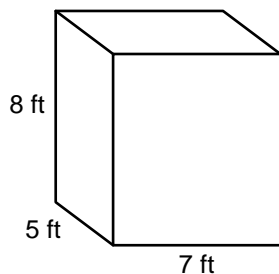
Volume: _____

(3)



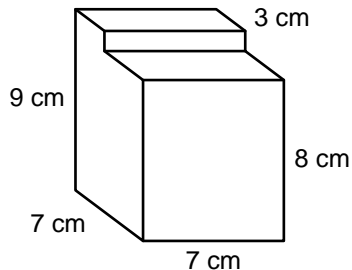
Volume: _____

(4)



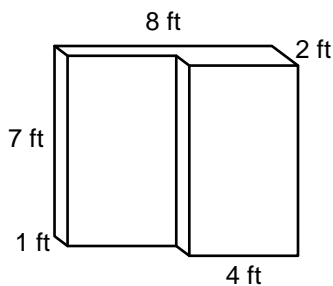
Volume: _____

(5)



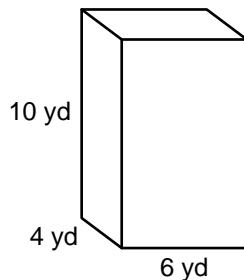
Volume: _____

(6)



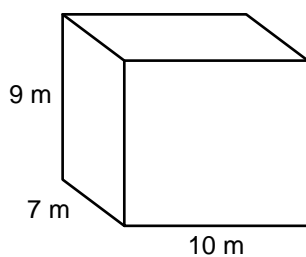
Volume: _____

(7)



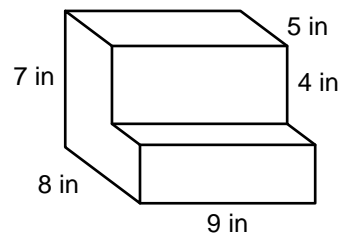
Volume: _____

(8)



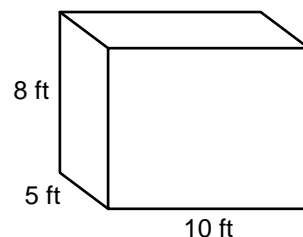
Volume: _____

(9)



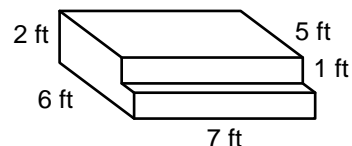
Volume: _____

(10)



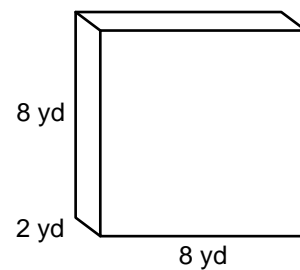
Volume: _____

(11)



Volume: _____

(12)



Volume: _____

Calculating Volume

ANSWER KEY

(

(